

# AZAAN INTERNATIONAL SCHOOL

Grade - II

Activity Sheet- VIII

Subject-MATHS


Name: \_\_\_\_\_ Class: \_\_\_\_\_ Sec: \_\_\_\_\_


## CHAPTER NO: 8. MULTIPLICATION

### I. Fill in the blanks with the correct answers.


1. \_\_\_\_\_ is a process of repeated addition. (Subtraction / Multiplication).
2. The first part in a multiplication statement is called \_\_\_\_\_. (Multiplier / Product).
3. The symbol used in a multiplication fact is \_\_\_\_\_. (X / +)
4. Solve  $6 + 6 + 6 + 6 =$  \_\_\_\_\_. (42 / 24)
5. In a given statement  $5 \times 7 = 35$ , 7 is called as \_\_\_\_\_. (Multiplicand/ Sum.)

### II. Write the product for each sum below .

1.   
 $3 \times 2 =$  \_\_\_\_\_

2.   
 $2 \times 4 =$  \_\_\_\_\_

3.   
 $2 \times 5 =$  \_\_\_\_\_

4.   
 $3 \times 4 =$  \_\_\_\_\_

### III. Match the following.

- |                        |                  |
|------------------------|------------------|
| a. $4 + 4 + 4$         | A. $2 \times 6$  |
| b. $6 + 6$             | B. $3 \times 4$  |
| c. $5 + 5 + 5 + 5 + 5$ | C. $2 \times 10$ |
| d. $9 + 9 + 9$         | D. $5 \times 5$  |
| e. $10 + 10$           | E. $3 \times 9$  |

**IV. Solve the following multiplication problems by drawing circles.**

a.  $2 \times 7 =$  \_\_\_\_\_



b.  $5 \times 3 =$  \_\_\_\_\_



**V. Solve the given word problem.**

1. There are 9 grapes in a bunch. How many grapes will be there in 3 such bunches?

Tens   Ones

9

x        3

\_\_\_\_\_ x \_\_\_\_\_ = \_\_\_\_\_

\_\_\_\_\_

\_\_\_\_\_

There are \_\_\_\_\_ grapes in all.